

A dding Apples

Name







You add to find to find out how many things there are altogether.
Below we are adding **2** apples and **1** apple.
The **+** sign is used to show this.







$$2 + 1 = 3$$



Try these addition activities:




 + 
 =



 + =



 + =


 + 
 =



 + =



 + =

A

dding/Subtracting 0

Name

When you add "0" to any number, the sum is always that number.
When you subtract "0" from any number, the difference is always that number.
Add or subtract the numbers and write the sum in the boxes.



$$2 - 0 = \square$$



$$0 + 6 = \square$$



$$4 - 0 = \square$$



$$0 + 4 = \square$$



$$1 + 0 = \square$$



$$3 - 0 = \square$$



$$0 + 5 = \square$$



Adding 1

Name

Add the numbers and draw a line to the group that has the same number of watermelons as the sum.

$1 + 2 =$



$1 + 5 =$



$1 + 1 =$



$1 + 6 =$



$4 + 1 =$



$3 + 1 =$



Adding 2

Name



Add the numbers together and then fill in the circle next to the correct sum.



$$2 + 2 = \textcircled{\quad} 4 \quad \textcircled{\quad} 1 \quad \textcircled{\quad} 8 \quad \textcircled{\quad} 6$$

$$5 + 2 = \textcircled{\quad} 1 \quad \textcircled{\quad} 9 \quad \textcircled{\quad} 7 \quad \textcircled{\quad} 0$$

$$2 + 1 = \textcircled{\quad} 9 \quad \textcircled{\quad} 4 \quad \textcircled{\quad} 6 \quad \textcircled{\quad} 3$$

$$0 + 2 = \textcircled{\quad} 7 \quad \textcircled{\quad} 2 \quad \textcircled{\quad} 5 \quad \textcircled{\quad} 1$$

$$8 + 2 = \textcircled{\quad} 8 \quad \textcircled{\quad} 4 \quad \textcircled{\quad} 3 \quad \textcircled{\quad} 10$$

$$2 + 2 = \textcircled{\quad} 7 \quad \textcircled{\quad} 4 \quad \textcircled{\quad} 2 \quad \textcircled{\quad} 6$$

$$6 + 2 = \textcircled{\quad} 8 \quad \textcircled{\quad} 4 \quad \textcircled{\quad} 6 \quad \textcircled{\quad} 0$$

Adding 3

Name _____



Add the fruit together and write the sum in the boxes.

$$3 \text{ grapes} + 3 \text{ apples} = \square$$

$$3 \text{ strawberries} + 4 \text{ apples} = \square$$

$$4 \text{ apples} + 3 \text{ bananas} = \square$$

$$3 \text{ apples} + 1 \text{ orange} = \square$$

$$3 \text{ cherries} + 4 \text{ apples} = \square$$

$$3 \text{ blueberries} + 4 \text{ apples} = \square$$

$$3 \text{ apples} + 6 \text{ raspberries} = \square$$

$$4 \text{ apples} + 3 \text{ watermelon slices} = \square$$

Adding 4

Name

Add the numbers together and then draw a line to match the numbers with the correct sum.

$$\begin{array}{r} 4 \\ + 6 \\ \hline \end{array}$$

$$\begin{array}{r} 5 \\ + 4 \\ \hline \end{array}$$

$$\begin{array}{r} 4 \\ + 3 \\ \hline \end{array}$$

$$\begin{array}{r} 1 \\ + 4 \\ \hline \end{array}$$

$$\begin{array}{r} 4 \\ + 7 \\ \hline \end{array}$$

4

10

7

2

5

3

6

8

9

11



Name

Write the number of fruit and the sum
in the correct red boxes.



+



=



+



=



+




=



+



=



+



=



+



=

Sweet Addition!

Name _____

Add the dessert count in each group.
For each treat, color in a square to count -
then write the number in the big square!



Write the number!

--

--	--	--	--	--	--	--	--	--	--



Write the number!

--

--	--	--	--	--	--	--	--	--	--



Write the number!

--

--	--	--	--	--	--	--	--	--	--



Write the number!

--

--	--	--	--	--	--	--	--	--	--



Write the number!

--

--	--	--	--	--	--	--	--	--	--



Write the number!

--

--	--	--	--	--	--	--	--	--	--



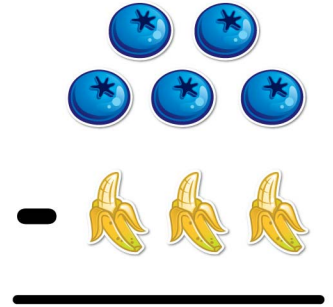




S

ubtraction

Name _____

Add the fruit together and write the sum in the boxes.



Add or subtract the numbers and then color in the space with the color for the matching answer!

red

3

blue

7

yellow

5

purple

4

orange

1

